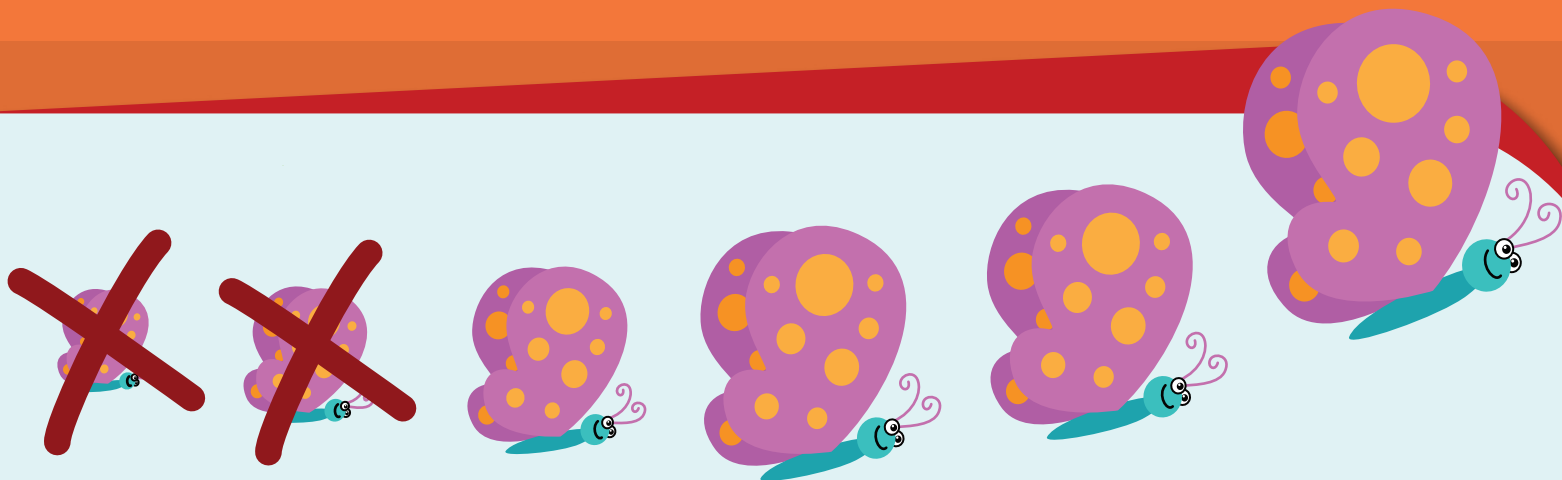


Subtraction


Action

P

Preschool



$$6 - 2 = 4$$



$$4 - 1 = 3$$

Table of Contents

Subtraction Action

Preschool Math Subtraction #1
Preschool Math Subtraction #2
Preschool Math Subtraction #3
Preschool Math Subtraction #4
Preschool Math Subtraction #5
Green Thumb Subtraction
 Trees Subtraction
 Birds Subtraction
 Veggies Subtraction
Chicken & Eggs Subtraction
Outer Space Subtraction
 Stars Subtraction
 Blossoms Subtraction
 Fruity Subtraction
 Zoo Subtraction
Let's Bake! Subtraction
 Leaves Subtraction
 Dessert Subtraction
 How Many Are Left?
 Mouse Snack
 Falling Apples
Animals Subtraction


Certificate of Completion

Want more workbooks? Join [Education.com Plus](http://www.education.com/education-plus/) to save time and money.
<http://www.education.com/education-plus/>




Preschool MATH Subtraction

Count the bees, then cross out the number of bees you need to subtract. How many do you have left?
Then color in the bees at the bottom of the page!




$6 - 1 = \underline{5}$




$7 - 5 = \underline{\quad}$




$5 - 3 = \underline{\quad}$





$6 - 4 = \underline{\quad}$



$4 - 2 = \underline{\quad}$







$9 - 6 = \underline{\quad}$





Count the sea creatures, then cross out the number of creatures you need to subtract. How many do you have left?
Then color in the art at the bottom of the page!






$4 - 2 = \underline{2}$



$4 - 3 = \underline{\quad}$



$7 - 1 = \underline{\quad}$






$3 - 2 = \underline{\quad}$



$8 - 5 = \underline{\quad}$



$10 - 7 = \underline{\quad}$



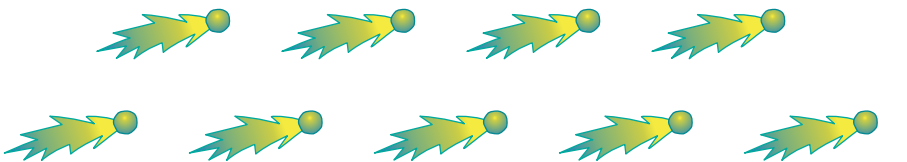
Count the items, then cross out the number of things you need to subtract. How many do you have left?
Then color in the art at the bottom of the page!

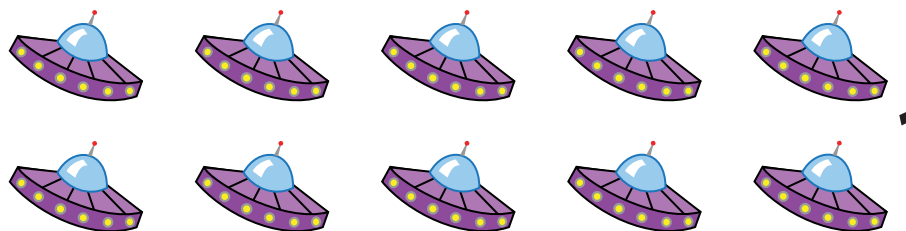

 $7 - 5 = \underline{2}$


 $4 - 1 = \underline{\quad}$


 $5 - 2 = \underline{\quad}$


 $8 - 7 = \underline{\quad}$


 $9 - 2 = \underline{\quad}$


 $10 - 3 = \underline{\quad}$




Preschool **MATH** Subtraction


Count the bugs, then cross out the number of bugs you need to subtract. How many do you have left?
Then color in the bugs at the bottom of the page!


 $7 - 4 = \underline{3}$




 $5 - 4 = \underline{\quad}$

 $4 - 1 = \underline{\quad}$

 $6 - 3 = \underline{\quad}$

 $5 - 2 = \underline{\quad}$

 $8 - 4 = \underline{\quad}$




Preschool
MATH Subtraction

Count the butterflies, then cross out the number of butterflies you need to subtract. How many do you have left?

Then color in the art at the bottom of the page!



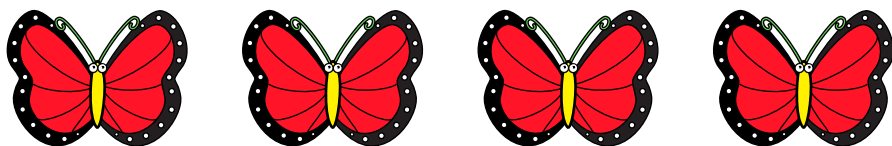
$$5 - 4 = \underline{1}$$



$$3 - 1 = \underline{\quad}$$




$$5 - 4 = \underline{\quad}$$



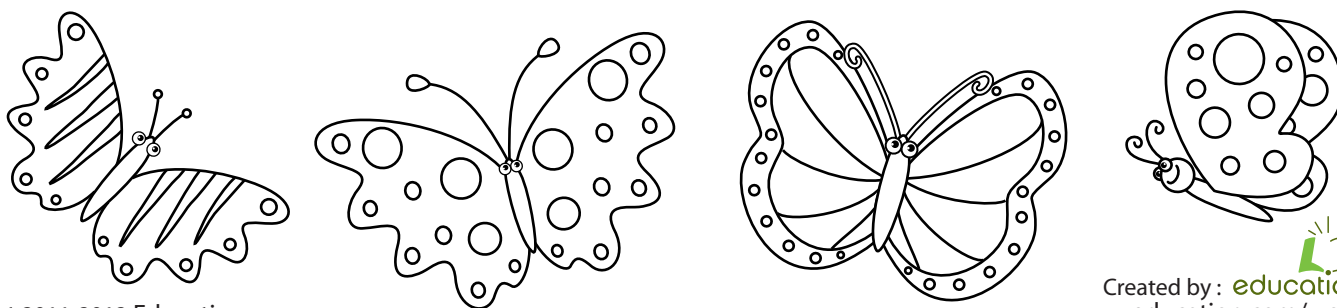
$$4 - 1 = \underline{\quad}$$



$$7 - 3 = \underline{\quad}$$



$$10 - 6 = \underline{\quad}$$

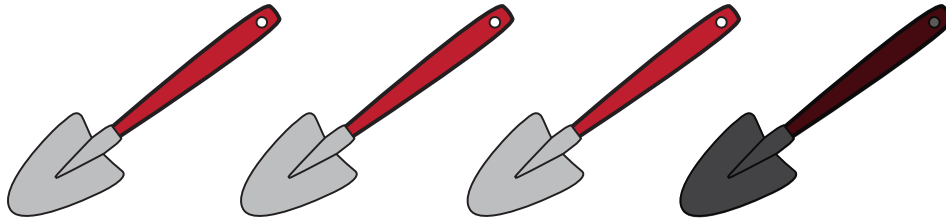


Green Thumb

Subtraction

Count how many items from the garden are in each box. Now take away the darker pictures. How many are left? Write your answer in the box on the right.

1



$$\begin{array}{r} 4 \\ -1 \\ \hline \end{array}$$

2



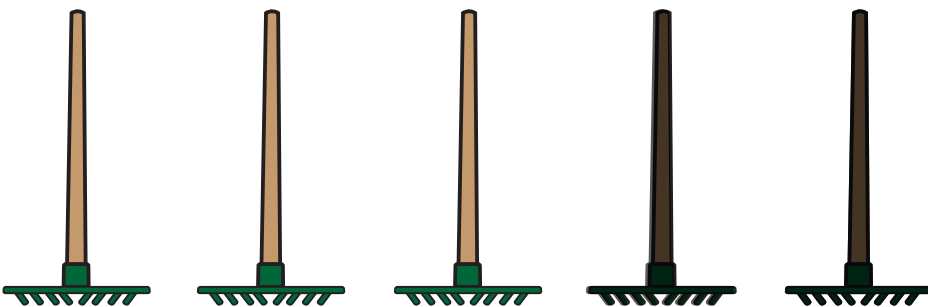
$$\begin{array}{r} 5 \\ -3 \\ \hline \end{array}$$

3



$$\begin{array}{r} 6 \\ -4 \\ \hline \end{array}$$

4



$$\begin{array}{r} 5 \\ -2 \\ \hline \end{array}$$

Trees

Subtraction

Count how many trees are in each box. Now take away the darker pictures.
How many are left? Write your answer in the box on the right.

1



$$\begin{array}{r} 5 \\ -3 \\ \hline \end{array}$$

2



$$\begin{array}{r} 6 \\ -2 \\ \hline \end{array}$$

3



$$\begin{array}{r} 3 \\ -1 \\ \hline \end{array}$$

4




$$\begin{array}{r} 7 \\ -6 \\ \hline \end{array}$$

Birds

Subtraction


Count how many birds are in each box. Now take away the darker pictures.
How many are left? Write your answer in the box on the right.

1




$$\begin{array}{r} 4 \\ -1 \\ \hline \end{array}$$

2




$$\begin{array}{r} 5 \\ -4 \\ \hline \end{array}$$

3



$$\begin{array}{r} 7 \\ -2 \\ \hline \end{array}$$

4




$$\begin{array}{r} 6 \\ -3 \\ \hline \end{array}$$

Veggies

Subtraction

Count how many veggies are in each box. Now take away the darker pictures.
How many are left? Write your answer in the box on the right.

1



$$\begin{array}{r} 6 \\ -1 \\ \hline \end{array}$$

2



$$\begin{array}{r} 4 \\ -2 \\ \hline \end{array}$$

3



$$\begin{array}{r} 5 \\ -3 \\ \hline \end{array}$$

4




$$\begin{array}{r} 3 \\ -2 \\ \hline \end{array}$$

Chickens & Eggs

Subtraction

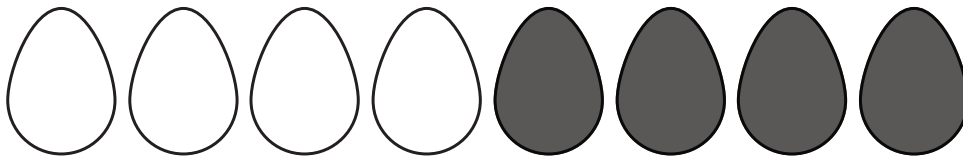
Count how many chickens and eggs are in each box. Now take away the darker pictures.
How many are left? Write your answer in the box on the right.

1




$$\begin{array}{r} 6 \\ -1 \\ \hline \end{array}$$

2



$$\begin{array}{r} 8 \\ -4 \\ \hline \end{array}$$

3



$$\begin{array}{r} 4 \\ -3 \\ \hline \end{array}$$

4




$$\begin{array}{r} 5 \\ -2 \\ \hline \end{array}$$

Outer Space

Subtraction

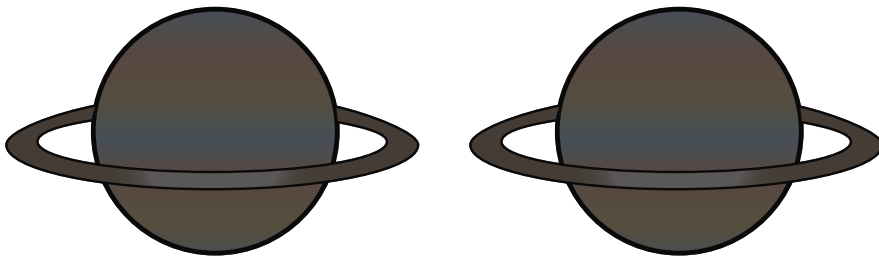
Count how many objects from outer space are in each box. Now take away the darker pictures. How many are left? Write your answer in the box on the right.

1



$$\begin{array}{r} 5 \\ -3 \\ \hline \end{array}$$

2



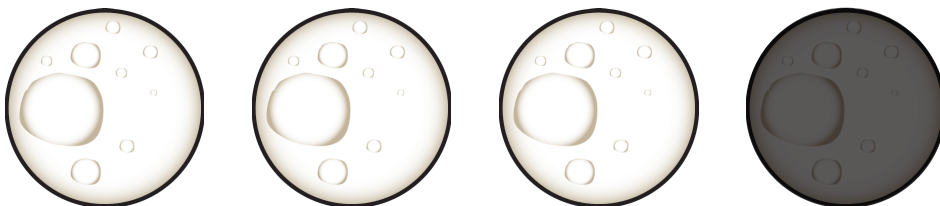
$$\begin{array}{r} 2 \\ -2 \\ \hline \end{array}$$

3



$$\begin{array}{r} 3 \\ -2 \\ \hline \end{array}$$

4




$$\begin{array}{r} 4 \\ -1 \\ \hline \end{array}$$

Stars

Subtraction

Count how many stars are in each box. Now take away the darker pictures.
How many are left? Write your answer in the box on the right.


1		$\begin{array}{r} 5 \\ -3 \\ \hline \end{array}$
2		$\begin{array}{r} 4 \\ -1 \\ \hline \end{array}$
3		$\begin{array}{r} 6 \\ -5 \\ \hline \end{array}$
4		$\begin{array}{r} 3 \\ -3 \\ \hline \end{array}$

Blossoms

Subtraction


Count how many flowers are in each box. Now take away the darker pictures.
How many are left? Write your answer in the box on the right.

1



$$\begin{array}{r} 5 \\ -4 \\ \hline \end{array}$$

2



$$\begin{array}{r} 3 \\ -2 \\ \hline \end{array}$$

3



$$\begin{array}{r} 6 \\ -1 \\ \hline \end{array}$$

4



$$\begin{array}{r} 4 \\ -2 \\ \hline \end{array}$$

Fruity

Subtraction

Count how many fruits are in each box. Now take away the darker pictures.
How many are left? Write your answer in the box on the right.

1



$$\begin{array}{r} 5 \\ -2 \\ \hline \end{array}$$

2




$$\begin{array}{r} 4 \\ -3 \\ \hline \end{array}$$

3



$$\begin{array}{r} 3 \\ -1 \\ \hline \end{array}$$





4



$$\begin{array}{r} 7 \\ -4 \\ \hline \end{array}$$

Zoo Subtraction

Count and cross out the animals according to the directions. Then write down the numbers and subtract. See the example.

	How many penguins are there?	3
	Cross out 1 penguin.	$- 1$
	How many penguins are left?	2
	How many hedgehogs are there?	
	Cross out 6 hedgehogs.	$-$
	How many hedgehogs are left?	
	How many snakes are there?	
	Cross out 3 snakes.	$-$
	How many snakes are left?	
	How many owls are there?	
	Cross out 5 owls.	$-$
	How many owls are left?	

Let's Bake!

Subtraction


Count how many baking items are in each box. Now take away the darker pictures.
How many are left? Write your answer in the box on the right.

1




$$\begin{array}{r} 4 \\ -2 \\ \hline \end{array}$$

2




$$\begin{array}{r} 5 \\ -4 \\ \hline \end{array}$$

3



$$\begin{array}{r} 3 \\ -1 \\ \hline \end{array}$$

4




$$\begin{array}{r} 7 \\ -3 \\ \hline \end{array}$$

Leaves

Subtraction


Count how many leaves are in each box. Now take away the darker pictures.
How many are left? Write your answer in the box on the right.

1




$$\begin{array}{r} 6 \\ -1 \\ \hline \end{array}$$

2



$$\begin{array}{r} 8 \\ -2 \\ \hline \end{array}$$

3



$$\begin{array}{r} 7 \\ -3 \\ \hline \end{array}$$

4



$$\begin{array}{r} 9 \\ -4 \\ \hline \end{array}$$

Dessert

Subtraction

Count how many desserts are in each box. Now take away the darker pictures.
How many are left? Write your answer in the box on the right.

1



$$\begin{array}{r} 4 \\ -1 \\ \hline \end{array}$$

2




$$\begin{array}{r} 5 \\ -3 \\ \hline \end{array}$$

3



$$\begin{array}{r} 6 \\ -2 \\ \hline \end{array}$$




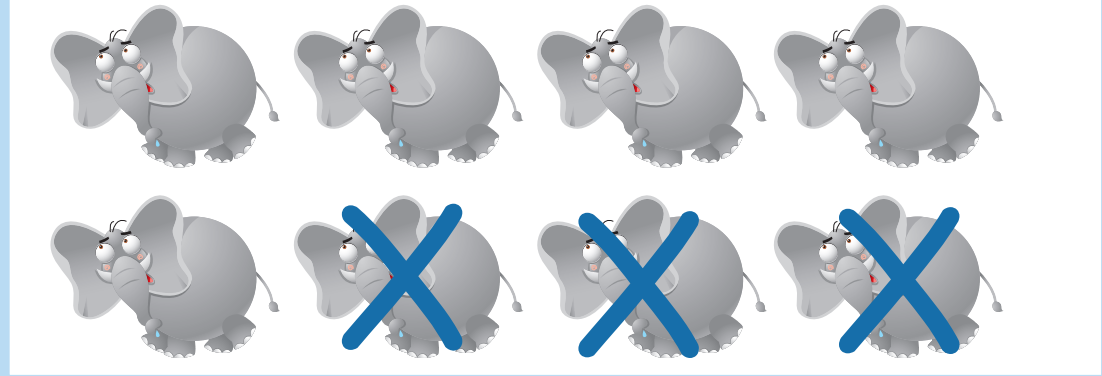
4




$$\begin{array}{r} 7 \\ -4 \\ \hline \end{array}$$

How Many Are Left?


Subtract the crossed out pictures and write the number in the box.

	$\begin{array}{r} 9 \\ - 3 \\ \hline \end{array}$
	$\begin{array}{r} 10 \\ - 5 \\ \hline \end{array}$
	$\begin{array}{r} 7 \\ - 2 \\ \hline \end{array}$
	$\begin{array}{r} 8 \\ - 3 \\ \hline \end{array}$


Mouse Snack



Count the pieces of cheese.
Count how many pieces the mouse eats.
Subtract to tell how many are left.




-




=




-



=




-



=



-



=

Falling Apples



Count the apples that have fallen from the tree.
Count how many apples are eaten.
Subtract to tell how many are left.

8 red apples

4 eaten apples

—

□

7 green apples

2 eaten apples

—

□

8 yellow apples

6 eaten apples

—

□

8 red apples

2 eaten apples

—

□

8 green apples

1 eaten apple

—

□

10 yellow apples





3 eaten apples

—

□

Animal Subtraction

Count and cross out the animals according to the directions. Then write down the numbers and subtract. See the example.

	How many chicks are there?	5
	Cross out 4 chicks.	-4
	How many chicks are left?	1
	How many toads are there?	
	Cross out 2 toads	$-$
	How many toads are left?	$-$
	How many fish are there?	
	Cross out 3 fish.	$-$
	How many fish are left?	$-$
	How many ladybugs are there?	
	Cross out 5 ladybugs.	$-$
	How many ladybugs are left?	$-$

Great job!

is an Education.com math superstar

